

First Term Questions – Level 2 (Mathematics)

Name: _____


PM : 40

Section: _____ Date: _____

FM : 100

Q. 1. Write the missing numbers from 0 till 20.

(15 × 2 = 30)



Q. 2. Count and match with numbers name.


(2 × 3 = 6)



seven



four

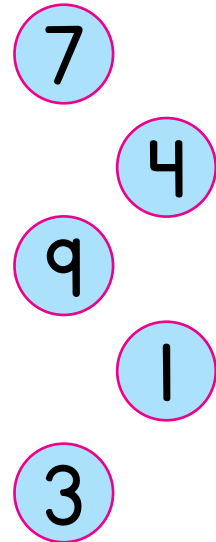
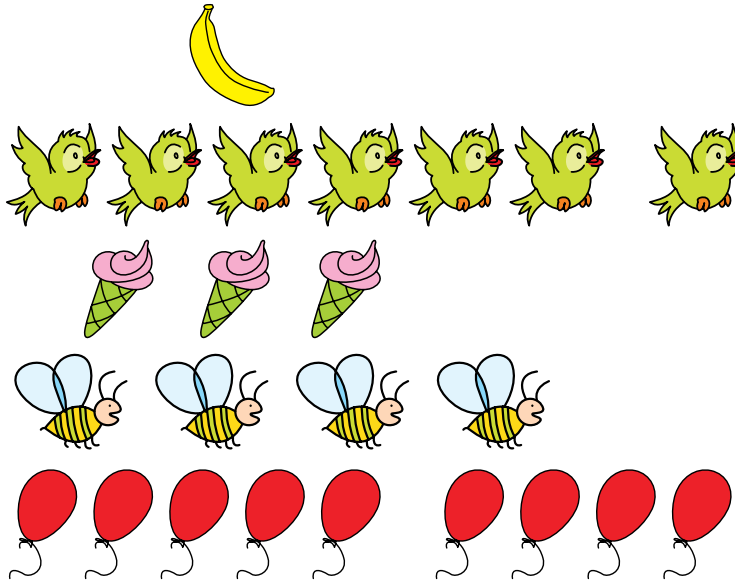


five



Q. 3. Count and match.

(2 × 5 = 10)



Q. 4. Fill in the missing numbers.

(10 × 2 = 20)

(a) What comes before?

(b) What comes after?

_____	7
_____	2
_____	5
_____	1
_____	8

8	_____
15	_____
11	_____
18	_____
19	_____

(c) What comes in between?

(5 × 2 = 10)




7	_____	9		15	_____	17		10	_____	12
3	_____	5		17	_____	19				






Q. 5. Count and write $>$, $<$ and $=$ in the correct boxes.

(4 × 1 = 4)




a)





a)



a)



a)



Q. 6. Write the number names of the followings:

(5 × 2 = 10)

12

8

5


1

17



Q. 7. Draw the objects according to its numbers.

($3 \times 2 = 6$)

i)  = 

ii)  = 

iii)  = 

Q. 8. Draw 5 apples in 1 tree and 0 apple in another tree.

(4)

