

Second Term Questions – Level 2 (Mathematics)

Name: _____

FM : 100

Section: _____ Date: _____

PM : 40

Q. 1. Match the following.

(5 × 1 = 5)

11

15

20

18

17

Eighteen

Seventeen

Fifteen

Eleven

Twenty

Q. 2. Draw the correct number of dots in the box.

(5 × 2 = 10)

5

9

2

3

7

Q. 3. Write the missing numbers.

(15 × 1 = 15)

1 _____ 4 _____ 8

_____ 14

_____ 18 _____








Q. 4. Write the numbers backwards.

(10 × 1 = 10)

12 _____
_____ 1

Q.5. Write the numbers.

(5 × 2 = 10)

Twenty 
Four 
Eighteen 
Seven 
Fifteen 

Q.6. Write the number names.

(5 × 2 = 10)

11 
15 
17 
9 
8 

Q.7. Draw the correct sign (>, < or =).

(5 × 2 = 10)

a.   

b.   

c.   

d.   

e.   











Q. 8. What comes before, after and in between?

(10 × 1 = 10)

a. _____ 12	b. _____ 17	c. 5 _____ 7	d. 1 _____ 3
e. 16 _____	f. 19 _____	g. 10 _____ 12	h. _____ 15
i. 9 _____		j. _____ 19	

Q. 9. Count and write :

(5 × 2 = 10)

	+		=	<input type="text"/>
	+		=	<input type="text"/>
	+		=	<input type="text"/>
	+		=	<input type="text"/>
	+		=	<input type="text"/>

Q. 10. Skip count the numbers by 2's and write upto 12.

(5 × 2 = 10)

2 _____



