

Final Term Questions – Level 2 (Mathematics)

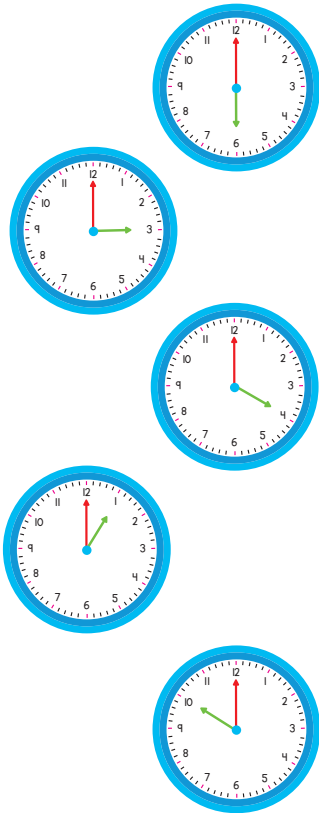
Name: _____

FM : 100

Section: _____ Date: _____

PM : 40

Q. 1. Match the clock with the correct time. (10)



4 o'clock





6 o'clock

10 o'clock

1 o'clock

3 o'clock

Q. 2. Tick (✓) the correct answer. (8)

- a.  = crescent circle semicircle
- b.  = rectangle rhombus triangle
- c.  = heart semicircle crescent
- d.  = oval circle square



Q. 3. Write months' names in the right order.

(12)

September		1
March		2
July		3
October		4
December		5
January		6
November		7
May		8
June		9
August		10
February		11
April		12

Q. 4. Write their number names.

(10)

20 = _____

44 = _____

12 = _____

38 = _____

50 = _____



Q. 5. Draw the correct sign ($>$, $<$ or $=$).

(10)

a) 50 _____ 40

b) 9 _____ 19



c) 26 _____ 28



d) 11 _____ 11

e) 35 _____ 31

Q. 6. Count and add.

(10)

a)  +  = _____

b)  +  = _____

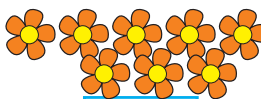

c)  +  = _____

d)  +  = _____

e)  +  = _____

Q. 7. Count and subtract.

(10)

a)  -  = _____

b)  -  = _____

c)  -  = _____






d)  -  = _____

e)  -  = _____



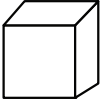
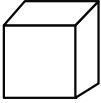
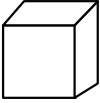
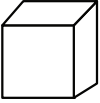
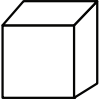
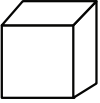
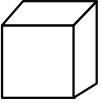
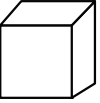
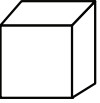
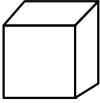
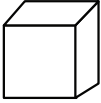
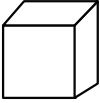
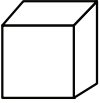
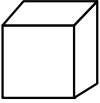
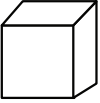
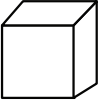
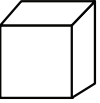
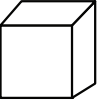
Q. 8. Draw hour hand as indicated.

(10)

	→	6 o'clock
	→	8 o'clock
	→	11 o'clock
	→	5 o'clock
	→	9 o'clock

Q. 9. Skip count by 3s and colour the gift box.

(10)

								
0	1	2	3	4	5	6	7	8
								
9	10	11	12	13	14	15	16	17

Q. 10. Colour the rainbow.

(10)

