

Second Term Questions – Level 3 (Mathematics)

Name: _____

FM : 100

Section: _____ Date: _____

PM : 40

Q. 1. Match the following.

(5 × 2 = 10)

5

25

37

43

50

Thirty seven

Fifty

Forty three

Twenty five

Five

Q. 2. Write the missing numbers.

(20 × 1 = 20)

25					30						36	
		40			43							50

Q. 2. Write the missing numbers.

(20 × 1 = 20)



Q. 4. Color the correct number names.

(5 × 2 = 10)

20	Twenty
	Twelve

36	Thirty Six
	Twenty Six

50	Fifteen
	Fifty

16	Sixteen
	Sixty

48	Forty three
	Forty eight

Q. 5. Fill tens or ones box.

(5 × 2 = 10)

a. **Tens** **Ones**

11 =

●

 +

b. 8 =

--

 +

c. 15 =

●

 +

d. 17 =

--

 +

●	●	●	●	●
●	●			

e. 10 =

--

 +



Q. 6. Write comes before, after and in between. (10 × 1 = 10)

a. _____ 5	b. 11 _____ 12	c. _____ 19	d. 29 _____
e. 29 _____ 31	f. _____ 43	g. 50 _____	h. _____ 39
i. 46 _____ 48		j. 51 _____	

Q. 7. Write the number names. (5 × 2 = 10)

- | | |
|-------------|-------------|
| a. 7 _____ | d. 47 _____ |
| b. 11 _____ | e. 19 _____ |
| c. 30 _____ | |

Q. 8. Count, add and write the numbers. (5 × 2 = 10)

i. _____

ii. _____

iii. _____

iv. _____


v. _____



Q. 9. Look and draw.

(5 × 2 = 10)

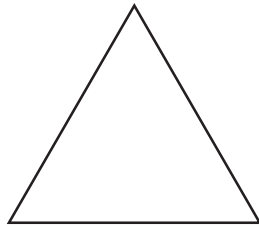
5



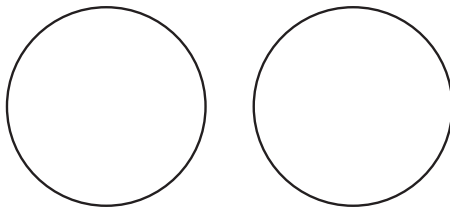
4



2



4



6

