

## Final Term Questions – Level 3 (Mathematics)

Name: \_\_\_\_\_

FM : 100

Section: \_\_\_\_\_ Date: \_\_\_\_\_

PM : 40

Q. 1. Match the ordinal numbers with their names. (10)

4th

Third

10th

First

8th

Eight

1st

Tenth

3rd

Fourth

Q. 2. Tick (✓) the correct option. (10)



- a. quarter past three
- b. three o'clock
- c. half-past three



- a. half past one
- b. six o'clock
- c. quarter to six



- a. seven o'clock
- b. three o'clock
- c. quarter past seven



- a. twelve o'clock
- b. six o'clock
- c. half-past twelve



- a. quarter past ten
- b. ten o'clock
- c. quarter to ten



Q. 3. Fill in the missing reverse counting numbers. (10)

40 \_\_\_\_\_ 29

Q. 4. Write down days of the week. (10)

3rd = Tuesday

1st = \_\_\_\_\_

7th = \_\_\_\_\_

5th = \_\_\_\_\_

2nd = \_\_\_\_\_

6th = \_\_\_\_\_

Q. 5. Write the table of 10 and their number names. (20)

$10 \times 1$  = \_\_\_\_\_

$10 \times 2$  = \_\_\_\_\_

$10 \times 3$  = \_\_\_\_\_

$10 \times 4$  = \_\_\_\_\_

$10 \times 5$  = \_\_\_\_\_

$10 \times 6$  = \_\_\_\_\_

$10 \times 7$  = \_\_\_\_\_

$10 \times 8$  = \_\_\_\_\_

$10 \times 9$  = \_\_\_\_\_

$10 \times 10$  = \_\_\_\_\_



Q. 6. Write down the correct answer from the given box.

(10)

a) 

10	11	12
----	----	----

Which numbers come before 12?

\_\_\_\_\_

b) 

1	2	3
---	---	---

Which numbers comes after 2?

\_\_\_\_\_

c) 

22	23	24	25
----	----	----	----

Which numbers comes between 23 and 25?

\_\_\_\_\_

d) 

45	46	47
----	----	----

Which numbers comes before 46?

\_\_\_\_\_

a) 



33	34	35
----	----	----



Which number comes in between?



\_\_\_\_\_







Q. 7. Write down the correct answer. (10)

a)  -  = \_\_\_\_\_

b)  +  = \_\_\_\_\_

c)  +  = \_\_\_\_\_

d)  -  = \_\_\_\_\_

e)  +  = \_\_\_\_\_

Q. 8. Colour tables with given colour codes. (10)

Last week

Nextweek

Sun	Mon	Tue	Wed	Thu	Fri	Sat
1	2	3	4	5	6	7
8	9	10	11	12	13	14
15	16	17	18	19	20	21
22	23	24	25	26	27	28
29	30	31				

This week →

Q. 9. Draw hands of the clock showing 8 o'clock and colour it. (10)

