

Final Term Questions – Level 1 (Mathematics)

Name: _____


FM : 100

Section: _____ Date: _____

PM : 40

Q. 1. Count and match.


(10)



4




10



16




7



11

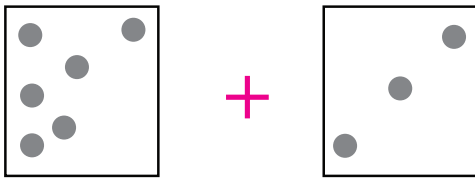
Q. 2. Write the numbers from 11 to 20 inside given clouds.

(10)

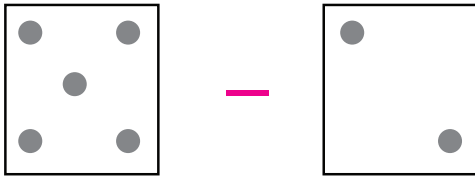


Q. 3. Circle the correct answer.

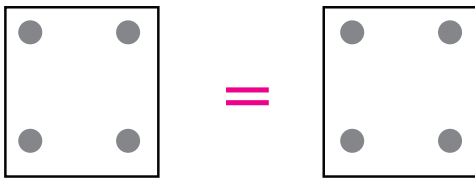
(10)




10	9	8
----	---	---




3	5	2
---	---	---



more	less	equal
------	------	-------



6	3	7
---	---	---



2	4	3
---	---	---

Q. 4. Draw dots in the box.

(10)

10

●	●																		
---	---	--	--	--	--	--	--	--	--	--	--	--	--	--	--	--	--	--	--

7

--	--	--	--	--	--	--	--	--	--	--	--	--	--	--	--	--	--	--	--

16

--	--	--	--	--	--	--	--	--	--	--	--	--	--	--	--	--	--	--	--

5




--	--	--	--	--	--	--	--	--	--	--	--	--	--	--	--	--	--	--	--




9




--	--	--	--	--	--	--	--	--	--	--	--	--	--	--	--	--	--	--	--









Q. 5. Draw the correct sign. (<, > or =). (10)

a.   




b.   




c.   




d.   




e.   




Q. 6. Count, add and draw the correct number of shapes. (10)

 +  = 




 +  = 




 +  = 




 +  = 




 +  = 




Q. 7. Count and subtract. (10)

 -  = 

 -  = 

 -  = 

 -  = 

 -  = 



Q. 8. What comes in before, after and between? Fill in the empty spaces.

(10)

a. _____ 4 _____

b. _____ _____ 18

c. 10 _____ _____

d. 18 _____ _____

e. _____ _____ 16

Q. 9. Find and colour number 5 and 12 with the given colour code.

(10)



12	11	10	5	2
15	12	16	5	6
12	17	5	18	7
13	5	19	12	8
5	11	10	9	12

Q. 10. Join the dots and colour.

(10)

