

Final Term Questions – Level 2 (Science)

Name: _____

FM : 100

Section: _____ Date: _____

PM : 40

Q. 1. Match the following.

(10)


spinach

broccoli

maize

cucumber

okra



Q. 2. Circle the living things.


(10)

school bag	notebook	tree
monkey	cricket bat	mat
parrot	mobile	laptop
boy	ball	bottle
pen	paper	hen



Q. 3. Tick (✓) the unhealthy food.


(10)



Q. 4. What are they? Write.

(12)

[water animal, wild animal or domestic animal]



Q. 5. What do we get from these farm animals? Write.

(8)


milk	wool	meat	egg
------	------	------	-----


- a) chicken _____
- b) cow _____
- c) sheep _____
- d) goat _____


Q. 6. Whose baby am I? Write.


(8)

lion	sheep	goat	cow
------	-------	------	-----

a)  I am a baby of _____.


b)  I am a baby of _____.


c)  I am a baby of _____.


d)  I am a baby of _____.

Q. 7. Where do we wear them in winter? Write


(10)

a)  _____.

b)  _____.

c)  _____.

d)  _____.

d)  _____.



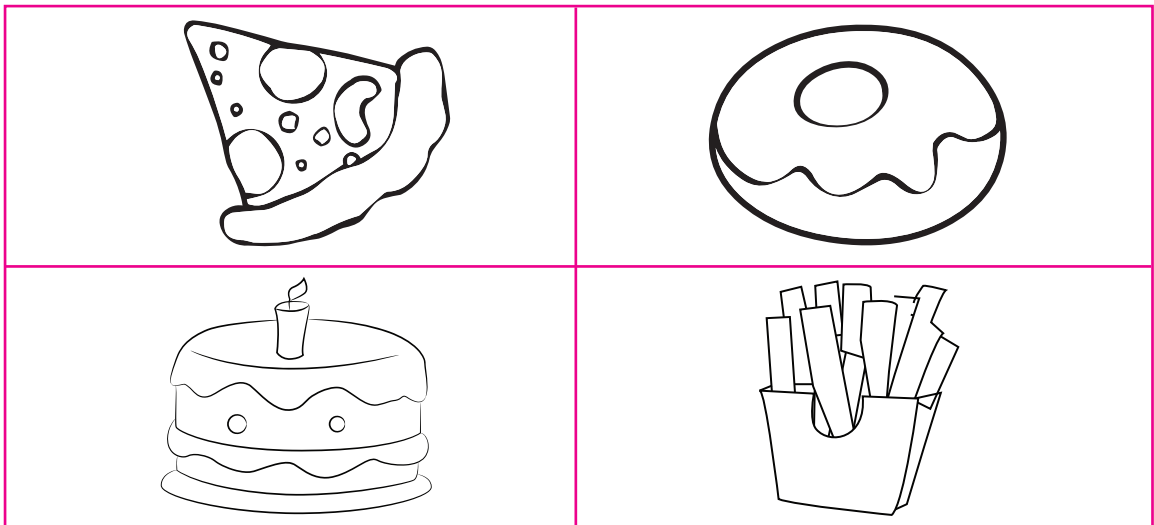
Q. 8. List down things that we see during day and night.

(12)

blue sky	owl	star	cloud	moon	sun
day			night		

Q. 9. Colour only "sweets and desserts".

(10)



Q. 10. Colour pictures using suitable colours.

(10)

