


First Term Questions - Level 3 (Social Studies)



Stamp

Name:

Section: Date:



PM: 40

FM: 100

Q.1 Match the tools with the correct "Community helpers". 5x2 = 10



astronaut



mechanic



dentist



architect



chef

Q.2 Fill the missing letters to complete the name of vehicles given below.

5x2 = 10

tr.....ct.....r

tr.....c.....

bulld.....zer

v.....n

a.....ropl.....n.....



Q. 3 Circle the correct answer:

5x2 = 10

i. Who teach us in school?

- a. chef b. teacher c. mechanic.

ii. Who checks our teeth?

- a. dentist b. veterian c. teacher

iii. Who fixes our car?

- a. architest b. mechanic c. doctor

iv. Who designs our house?

- a. architect b. soldier c. nurse

v. Who travels in a spaceship?

- a. driver b. astronaut c. soldier

Q. 4 Write two tools for each "community helpers".

5x2 = 10

- a. Mechanic
b. Teachers
c. Chef
d. Architech
e. News Reporter

Q. 5 Name any three things made with fabric.

3x2 = 6

for e.g.: shirt

- a. b. c.

Q. 6 Name any four things made of wood.

4x2 = 8

for e.g.: door

- a. b. c. d.



Q. 7 Fill in the blanks with correct words:

5x2 = 10

- a. The checks our teeth and gum. (teacher/dentist)
- b. The prescribes medicines for sick and injured animal. (doctor / veterinarian)
- c. A is the main cook in a restaurant. (chef / nurse)
- d. A helps us by fixing vehicles and machines. (soldier / machanic)
- e. A guards our country. (soldier / scientist)

Q. 8 Match the pictures with its materials.

5x2 = 10



fabric

paper

metal

wood

plastic

Q. 9 Name any three things made with plastic..

3x2 = 6


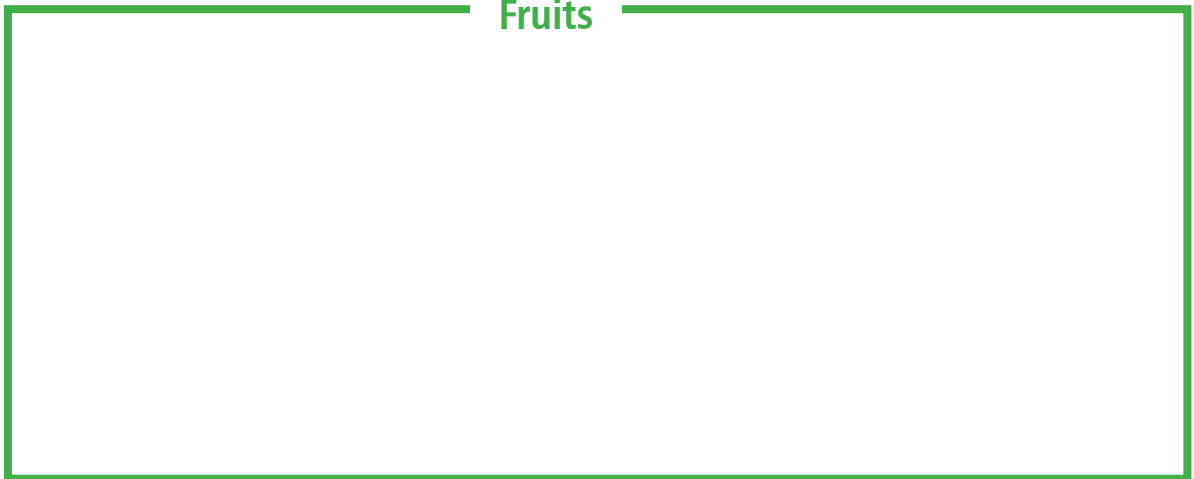
for e.g.: Swimming tube

- a. b. c.



Q. 10 Draw picture of food items you like and colour it.

5x2 = 10



Q. 11 Name the vehicles.

5x2 = 10



.....



.....



.....



.....



.....

