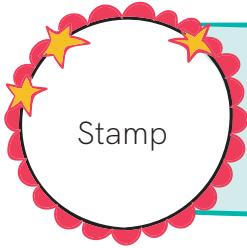


Second Term Questions - Level 3 (Science)



Stamp

Name:

Section: Date:



PM: 40

FM: 100

Q.1 Match the following.

5x2 = 10

Laptop

TV

Blender

Microwave

Tablet



Q.2 Write the habits that we can do to keep ourselves healthy.

5x2 = 10

bathing

wearing clean clothes

playing in the mud

brushing teeth

eating healthy food

polishing shoes

.....

.....

.....



Q.3 Write the correct measure of given food items.

5x2 = 10

- a. (Glass / Scoop) of milk
- b. (Cube / Loaf) of bread
- c. (Scoop / Slice) of ice-cream
- d. (Box / Dozen) of eggs
- e. (Slice / Bowl) of soup


Q.4 Write the name of objects that floats on water.

4x2 = 8

Key	Ball	Brick	Ship
Soap	Feather	Log	Paper boat

.....
.....

Q.5 Look at the picture and write the name of the weather. 5x2 = 10



1.




2.



3.

4.

5.



Q.6 Answer in one word.

5x2 = 10

- a. We taste food with our
- b. We see with our
- c. We feel hot/cold by
- d. We smell things with our
- e. We hear with our

Q.7 Look at the picture and write how are they feeling.

5x2 = 10




.....



.....



.....



.....



.....



Q.8 Observe the pictures carefully and name the stages?

5x2 = 10



.....



.....



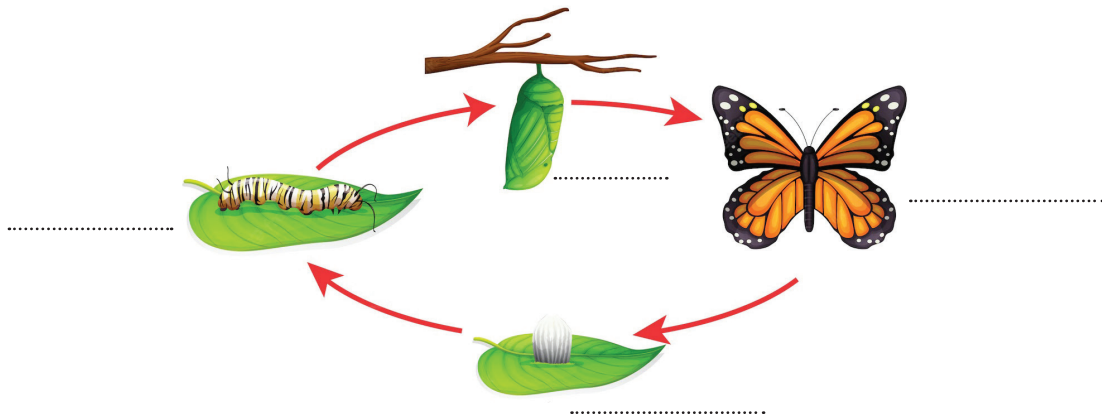
.....



.....



Q.9 Name the stage of the life cycle of butterfly.

4x2 = 8



Q.10 Number the life stage of a hen .

2x3 = 6



Q.11 Colour the pictures.

8

