

## Final Term Questions – Level 3 (Science)

Name: \_\_\_\_\_

FM : 100

Section: \_\_\_\_\_ Date: \_\_\_\_\_

PM : 40

Q. 1. Match the following.

(10)

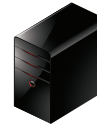
CPU

mouse

monitor

printer

keyboard



Q. 2. Tick (✓) the correct answer.

(10)

a) How many sense organs do we have?

- i) 6
- ii) 5
- iii) 4

d) I smell perfume with my.....

- i) skin
- ii) nose
- iii) tongue

b) We feel with our.....

- i) eyes
- ii) ears
- iii) skin

e) I read books with the help of my.....

- i) tongue
- ii) eyes
- iii) ears

c) Which sense organs helps us to hear?


- i) ears
- ii) eyes
- iii) nose



Q. 3. Name these parts of a plant drawing arrow.

(10)

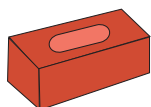
<b>branches</b>	<b>roots</b>	<b>leaves</b>	<b>bud</b>	<b>fruit</b>
-----------------	--------------	---------------	------------	--------------



Q. 4. Will it sink or float?

(10)

a)



\_\_\_\_\_

b)



\_\_\_\_\_

c)



\_\_\_\_\_

d)



\_\_\_\_\_

e)



\_\_\_\_\_

Q. 5. Write the name of insects from a given box.

(10)

ant	owl	grasshopper	mosquito	penguin
bear	beetle	caterpillar	dove	kitten

- a) \_\_\_\_\_
- b) \_\_\_\_\_
- c) \_\_\_\_\_
- d) \_\_\_\_\_
- e) \_\_\_\_\_

Q. 6. Write five things made up of wood.

(10)

- a) \_\_\_\_\_
- b) \_\_\_\_\_
- c) \_\_\_\_\_
- d) \_\_\_\_\_
- e) \_\_\_\_\_

Q. 7. List out five healthy habits.

(10)

- a) \_\_\_\_\_
- b) \_\_\_\_\_
- c) \_\_\_\_\_
- d) \_\_\_\_\_
- e) \_\_\_\_\_



Q. 8. Answer the following question.

(10)

a) Which bird can see in the dark?

\_\_\_\_\_ .

b) Which bird cannot fly?

\_\_\_\_\_ .

c) Which bird is a symbol of peace?

\_\_\_\_\_ .

d) Which bird can fly backwards?


\_\_\_\_\_ .

e) Which bird eat small animals?

\_\_\_\_\_ .

Q. 9. Colour the animals that can live both in water and land.

(10)



Q. 10. Draw and colour a mango tree.

(10)

A large empty rectangular box with rounded corners, intended for drawing and coloring a mango tree.

